






4 wat staat er onder de tomaten?


$9 - 5 = 6 -$ 


$10 - 3 = 9 -$ 


$9 - 4 = 8 -$ 


$9 - 8 = 2 -$ 


$6 - 3 = 9 -$ 


$10 - 5 = 8 -$ 


$8 - 5 = 9 -$ 

$10 - 6 = 6 -$ 


$7 - 6 = 5 -$ 


$10 - 8 = 5 -$ 


$6 - 4 = 10 -$ 


$9 - 6 = 8 -$ 


5 hoe betaal je? bedenk 2 manieren.













1 wat kan er onder de kool staan?

2 +  +  = 9

1 +  +  = 10

4 +  +  = 12

2 +  +  = 9

1 +  +  = 10

4 +  +  = 12

2 +  +  = 9

1 +  +  = 10




4 +  +  = 12


2 +  +  = 9




1 +  +  = 10



4 +  +  = 12




2 maak er 20 euro van. bedenk 2 manieren.





  




  


 


  


   

3 bedenk eraf sommen.













3 hoe betaal je? bedenk 2 manieren.

 12 euro	<input type="text"/>
 17 euro	<input type="text"/>
 19 euro	<input type="text"/>



4 reken uit.







- | | |
|---------------|-----------------|
| 7 - 7 = | 10 - 10 = |
| 7 - 6 = | 10 - 9 = |
| 5 - 5 = | 10 - 1 = |
| 5 - 4 = | 10 - 2 = |
| 5 - 3 = | 10 - 5 = |




- | | |
|---------------|---------------|
| 8 - 8 = | 9 - 9 = |
| 8 - 7 = | 9 - 8 = |
| 8 - 1 = | 6 - 6 = |
| 8 - 2 = | 6 - 5 = |
| 8 - 4 = | 6 - 3 = |

5 maak de getallen vast.



1 maak er 10 euro van. bedenk 2 manieren.

	<div data-bbox="571 203 839 360">5 ①</div> <div data-bbox="560 367 828 528">② ② ②</div>		<div data-bbox="1241 230 1509 396"></div> <div data-bbox="1230 400 1498 566"></div>
	<div data-bbox="555 562 823 728"></div> <div data-bbox="544 734 812 900"></div>		<div data-bbox="1225 593 1493 759"></div> <div data-bbox="1214 763 1482 929"></div>
	<div data-bbox="531 925 799 1090"></div> <div data-bbox="520 1097 788 1263"></div>		<div data-bbox="1206 956 1474 1122"></div> <div data-bbox="1195 1126 1463 1292"></div>



2 zoek steeds 2 getallen.

samen 9. kleur 2 hokjes.

 8	3	7	3	6	7	3	7	1	7	3	
 1	5	4	5	2	4	5	6	4	5	4	6

samen 10. kleur 2 hokjes.

5	2	1	6	4	5	3	5	6	7	4	8
8	4	5	9	7	3	4	6	3	5	3	6

GELDSOMMEN TERUGGEVEN

Kosten:	Ik betaal met:	Ik krijg terug
€ 4.-		€ 1.-
€ 8.-		€ 2.-
€ 2,50		€ 2.-
€ 5.-		€ 5.-
€ 3.-		€ 2.-
€ 1,50		€ 8,50
€ 5.-		€ 5.-
€ 8,50		€ 1,50
€ 1,50		€ 3.-

Tel de centen bij elkaar op



100 cent



10 cent












5 cent



50 cent



20 cent

 _____ cent	 _____ cent	 _____ cent
 _____ cent	 _____ cent	 _____ cent
 _____ cent	 _____ cent	 _____ cent










Werkblad geld.

Hoeveel geld moet er nog bij? Teken het geld erbij.



1. € 5	
2. € 2	
3. € 3,50	
4. € 4	
5. € 1	
6. € 7	

Waar ligt het goede bedrag?

<p>A</p>  <p>Waar ligt € 1,75?</p>	<p>B</p>  <p>A B C</p>	<p>C</p>  <p>B C</p>
<p>A</p>  <p>Waar ligt 80 cent?</p>	<p>B</p>  <p>A B C</p>	<p>C</p>  <p>B C</p>
 <p>Waar ligt 45 cent?</p>	 <p>A B C</p>	 <p>B C</p>